

MATHEMATICS STD 8

MATHEMATICS STANDARD EIGHT (8)

1. What is the place value of digit 9 in the difference between three million, six hundred and eighty two thousand, four hundred and two and one million six hundred and ninety four thousand, six hundred and eighteen.

- A. Hundred thousand
- B. Ten thousand
- C. Millions
- D. Thousands

2. Write forty two millions six hundred and eighteen thousand four hundred and two and seven thousandth in figures.

- A. 42618402.07
- B. 42680402.007
- C. 42618402.007
- D. 42618420.007

3. In a town there were three thousand and thirty men, two thousand five hundred and eighty women. The number of children was twice that of men. How many people altogether were in the town?

- A. 5610
- B. 11,670
- C. 6060
- D. 10770

4. What is the least denominator that can be used in the addition of $\frac{1}{2}$, $\frac{1}{3}$ and $\frac{1}{4}$

- A. 32
- B. 18
- C. 36
- D. 24

5. The area of a square plot is 1764m^2 . Poles are planted at intervals of 4m. How much money does a farmer require to fence the plot if one pole cost sh. 220?

- A. sh 9240
- B. sh 36,960
- C. sh. 880
- D. sh 168

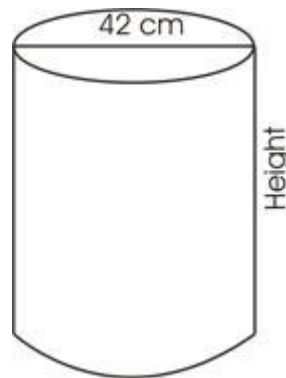
6. What is the next number in the pattern?

0.6, 0.7, 1.3, 2.0

- A. 4.7
- B. 3.3
- C. 4.2
- D. 3.8

7. The figure below holds 24.948 liters. If its diameter is 42cm. What is its height?

Take $\pi = \frac{22}{7}$



- A. 16cm
- B. 14cm
- C. 12cm
- D. 18cm

8. What is 36.098 rounded to two decimal places?

- A. 36.010
- B. 36.1
- C. 36.10
- D. 36.09

9. In 2004, the number of HIV patients recorded in a certain hospital was 360. After HIV awareness, the patients decreased by 30% in 2005. How many HIV patients were there in 2005?

- A. 252 B. 108
C. 216 D. 300

10. Peter sent his son to a supermarket to buy the following items

2kg sugar @ sh 60.00

2-2kg kasuku @ sh 380.00

2 packets of pishori rice @sh 70.00

2 packets exe flour for 220.00

He gave the shopkeeper sh. 1500. How much should he give the shopkeeper so as to get a balance of sh. 300?

- A. sh 260 B. sh 20
C. sh. 40 D. sh 140

11. When 7.156 is divided by 1000, what is the place value of digit 1?

- A. Tenth B. Thousandth
C. Hundredth D. Ten thousandth

12. Ann scored 48% in mathematics and 46% in science. Express the total scores as a decimal

- A. 94.0 B. 0.94
C. 9.4 D. 9.40

13. A circular table of diameter 91cm was decorated all round with flowers placed at intervals of 11cm. How many flowers were used? Take $\pi = \frac{22}{7}$

- A. 26 B. 13
C. 297 D. 37

14. A tank has a volume of 6.075m^3 . How many liters of water can it hold when full?

- A. 607.5 B. 60.75
C. 6075 D. 0.6075

15. What is the total value of digit 8 in 4386507?

- A. 8000 B. 800000
C. 800 000 D. 80000

16. After increasing the number of animals in a farm in the ratio of 5:2, there were 140 animals in the farm. What was the increase?

- A. 56 B. 112
C. 140 D. 84

17. What is the total value of 4 in the sum of 8326825 and 4818430?

- A. Forty thousand
B. 4000
C. Four thousand
D. Four thousandth

18. The following are properties of quadrilaterals

- (i) All sides are equal
- (ii) Diagonals are equal
- (iii) All angles are equal
- (iv) Has a pair of parallel lines
- (v) Diagonals are perpendicular bisectors
- (vi) Opposite sides are equal and parallel
- (vii) The sum of interior angles equals 360°

Which properties are for all quadrilaterals?

A. v and vii

B. viiC. iii

D. iii and vii

19. What is the value of

$$\frac{15.675}{0.015}$$

$$26.325 \div 1.17$$

(give your answer to 2 decimal places)

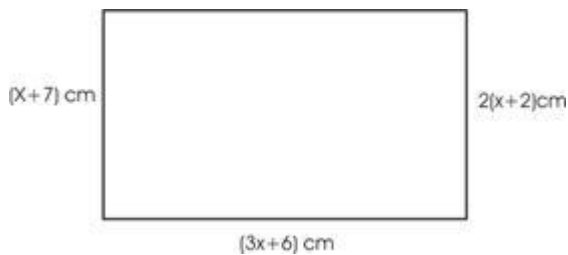
A. 46.44

B. 464.04

C. 464.40

D. 46.45

20. What is the perimeter of the figure below?



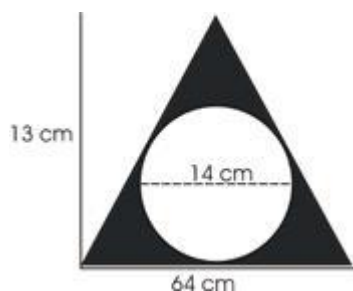
A. 30 cm

B. 300 cm

C. 50 cm

D. 150 cm

21. What is the area of the shaded part in the figure below?



A. 262 m^2

B. 154 cm^2

C. 416 m^2

D. 448 m^2

22. What is $0.4 + 0.8$ as a fraction?

A. $\frac{1}{2}$

B. $\frac{1}{2}$

C. $\frac{1}{2}$

D. $\frac{3}{2}$

23. An athlete running at an average speed of 36 km/h covered a certain distance in 7 minutes. What distance did he cover?

A. 4.2 km

B. 21.6 km

C. 1.512 km

D. 15.12 km

24. What is the value of?

$$6 - \frac{1}{2} \times \frac{1}{2} \div \frac{1}{2}$$

A. $\frac{5}{2}$

B. $\frac{6}{2}$

C. $\frac{3}{2}$

D. $\frac{3}{2}$

25. Below are the number of students who were admitted into various Kenya public universities in year 2014.

Maseno = 9500

Nairobi = 10250

Jomo Kenyatta = 2500

Egerton = 1250

How many more students were admitted in Nairobi than in both Jomo Kenyatta and Egerton?

A. 26250

B. 5000

C. 2500

D. 6500

26. A rectangular plot has a diagonal of 39 m and a width of 15 m. What is its area in Ares?

A. 540

B. 548

C. 58.5

D. 5.4

27. What is the simplified form of?

$$\frac{6x^9 2y^4}{4274}$$

- A. _____
- B. _____
- C. _____
- D. _____

28. Construct triangle XYZ whereby XY=8cm; ZX=6.5cm and angle ZXY=75°. On the triangle, draw a circle touching the three vertices. What is the measure of the radius?

- A. 9.2cm B. 4cm
- C. 4.6cm D. 2cm

29. What is the product of faces and vertices of a square prism?

- A. 48 B. 40
- C. 72 D. 72

30. Two lorries each weighing 3.8 tonnes when empty were each loaded with 320 bags of cement. What was the total mass of the lorries and cement if each bag of cement has a mass of 50kg?

- A. 35.8 tonnes
- B. 39.6 tonnes
- C. 32 tonnes
- D. 23.6 tonnes

31. Martin a newspaper vendor earns a salary of sh 2800. He is also given a 15% commission on all the papers sold. In one month he sold

200 newspaper at sh 35 each. What was his commission that month?

- A. sh 1050
- B. sh 3000
- C. sh 3850
- D. sh 1750

32. Wayne borrowed sh. 50,000 from a bank that charged compound interest at the rate of 12% p.a. How much did she pay back at the end of 30 months?

- A. sh 15,123.20
- B. sh 15,000
- C. sh. 66,483.20
- D. sh 65.000

33. Musa thought of a number. After subtracting 5 from its square, he got 139. What number had he thought of?

- A. 144 B. 12
- C. 139 D. 36

34. What is the value of?

$$1.5 \text{ of } 0.25 \div 1.5 + 4.5$$

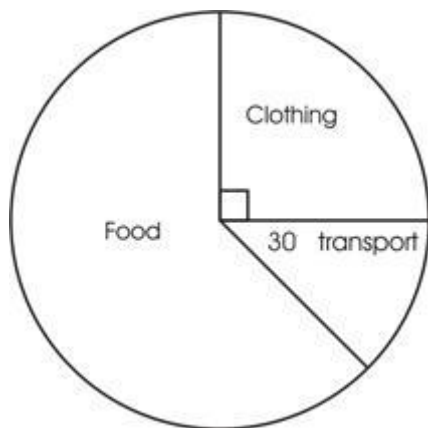
- A. 45.25 B. 4.525
- C. 7.5 D. 4.75

35. The line below is drawn to scale 1:250 000. What is the actual distance in kilometers?



- A. 162.50 B. 12.6
- C. 16.25 D. 1625

36. The pie chart below shows Harriet's monthly expenditure.



If she spends sh. 750 on transport, how much more does she spend on food than on clothing?

- A. sh. 750
- B. sh. 6000
- C. sh. 3750
- D. sh. 2250

37. The marked price of a refrigerator is sh. 30000. Mary bought it on hire purchase terms, which is 30% more than the marked price. She paid a deposit of sh. 10000 plus ten monthly installments. How much did she pay as installment?

- A. sh 900
- B. sh 9000
- C. sh 9200
- D. sh 2900

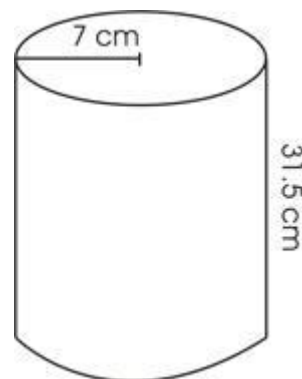
38. Construct quadrilateral PQRS whereby $PQ=8\text{cm}$ and $PS=10\text{cm}$. Angle $SPQ=70^\circ$. Draw the two diagonals to meet at point x. Measure angle SXR .

- A. 1030
- B. 400
- C. 790
- D. 760

39. A square of side 12cm has the same area as a triangle with a base of 9cm. What is the height of the triangle?

- A. 64cm
- B. 32cm
- C. 24cm
- D. 16cm

40. What is the volume of the cylinder below in cm^3 ? Take $\pi = \frac{22}{7}$



- A. 9702 cm^3
- B. 1270.5 cm^3
- C. 4851 cm^3
- D. 1617 cm^3

41. January 28th year 2008 was a Monday. Which day was March 14th the same year?

- A. Friday
- B. Tuesday
- C. Thursday
- D. Wednesday

42. A businessman bought 4 sacks of beans @ sh 5000 and later sold them at a profit of 33%. What was the selling price of the 4 sacks.

- A. sh 6600
- B. sh 26600
- C. sh 6650
- D. sh 24600

43. Mary borrowed sh 30000 from a bank which paid simple interest at the rate of 20% per year. How much interest had the money earned at the end of 2 years?

- A. sh 6000
- B. sh 12000
- C. sh 114000
- D. sh 144000

44. After sleeping for 5hrs 55min. Peter woke up at 3.40am. At what time had he gone to bed in 24hrs clock system?

- A. 2145hrs B. 0340hrs
C. 0945hrs D. 945hrs

45. Eighteen workers working at the same rate were to complete a piece of work in 15days. How much more days would it take if six workers failed to attend?

- A. $7\frac{1}{2}$ B. $4\frac{1}{2}$
C. $7\frac{1}{2}$ D. $7\frac{1}{2}$

The following are properties of a quadrilateral.

- i. Diagonals bisect each other 90°
- ii. Diagonals do not bisect each other at 90°
- iii. All sides are equal
- iv. Opposite sides are equal and parallel

46. Which properties are for squares only?

- A. i, iv B. i, iii
C. i, ii D. i only

47. Mary paid sh. 7600 for a carpet after getting a discount of 20%. What percentage discount would she get if she paid sh. 7220?

- A. 24% B. 28%
C. 76% D. 34%

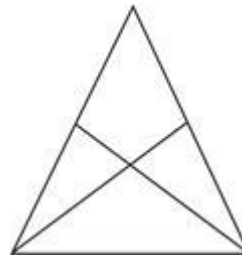
48. The father's age is 10 years older than his son while that of the mother was 5 years younger than the father. If the son is x years. What will be their total age in five years to come?

- A. $3x - 35$ B. $3x + 15$
C. $3x + 25$ D. $3x + 30$

49. The temperature of a liquid was recorded as 150°C . It was first cooled at the rate of 60°C per min for the first 8 minutes and then heated at the rate of 5°C for the rest of the period. What was its temperature after 15 minutes?

- A. 28°C B. 68°C
C. -295°C D. 63°C

50. How many triangles are in the figure below?



- A. 5 B. 4
C. 8 D. 9